

$$\textcircled{1} \text{ (a) } \frac{1}{2} m u^2 = \frac{1}{2} \times 58 \times 2^2 = 116 \text{ J}$$

$$\text{(b) altogether } \Delta h = 6 + 1 = 7 \text{ m}$$

$$\Delta GPE = m g \Delta h = 58 \times 9.8 \times 7 = 3978.8 \text{ J}$$

$$E_k = 116 + 3978.8 = 4094.8$$

$$\frac{1}{2} m v^2 = 4094.8$$

$$v = \sqrt{\frac{2 \times 4094.8}{58}} = 11.8828$$

$$v = 11.9 \text{ ms}^{-1}$$

$\textcircled{2}$	A (9,6)	2kg	C (3,8)	8kg
	B (2,4)	3kg	D (6,11)	7kg

$$\text{Total mass} = 2 + 8 + 3 + 7 = 20 \text{ kg}$$

$$20 \bar{x} = 9 \times 2 + 2 \times 3 + 3 \times 8 + 6 \times 7$$

$$20 \bar{x} = 90$$

$$\bar{x} = \frac{9}{2} \quad (= 4.5)$$

$$20 \bar{y} = 6 \times 2 + 4 \times 3 + 8 \times 8 + 11 \times 7 = 165$$

$$20 \bar{y} = 165 \Rightarrow \bar{y} = \frac{33}{4} \quad (= 8.25)$$

$$\text{Com is at } (4.5, 8.25)$$

$$\textcircled{3} \text{ (a) } \underline{a} = \frac{d\underline{v}}{dt} = (-2 \times 4 e^{-2t}) \underline{i} + (6 - 6t) \underline{j}$$

$$\underline{a} = -8e^{-2t} \underline{i} + 6(1-t) \underline{j}$$

$$\text{(b) (i) } \underline{F} = m\underline{a} = -40e^{-2t} \underline{i} + 30(1-t) \underline{j}$$

$$\text{(ii) } \underline{t=0} \quad \underline{F} = -40e^0 \underline{i} + 30(1-0) \underline{j} \\ = -40 \underline{i} + 30 \underline{j}$$

$$\text{magnitude} = \sqrt{(-40)^2 + (30)^2} = 50 \text{ N}$$

$$\text{(c) } \underline{F} \text{ acts due west} \Rightarrow \underline{F_j} = 0$$

$$\text{so set } 30(1-t) = 0 \\ \Rightarrow \underline{t=1 \text{ s}}$$

$$\text{(d) } \underline{r} = \int \underline{v} dt$$

$$= \int 4e^{-2t} dt \underline{i} + \int (6t - 3t^2) dt \underline{j}$$

$$= \left(\frac{-4}{2} e^{-2t} \right) \underline{i} + (3t^2 - t^3) \underline{j} + \underline{c}$$

$$\underline{r} = -2e^{-2t} \underline{i} + (3t^2 - t^3) \underline{j} + \underline{c}$$

$$\underline{t=0} \quad \underline{r} = 6 \underline{i} + 5 \underline{j}$$

$$6 = -2e^{-2 \times 0} + c_i$$

$$5 = (3(0) - 0) + c_j$$

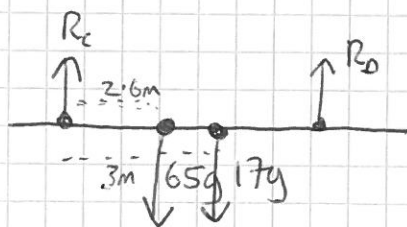
$$6 = -2 + c_i$$

$$\Rightarrow \underline{c_j = 5}$$

$$\Rightarrow \underline{c_i = 8}$$

$$\underline{r} = (-2e^{-2t} + 8) \underline{i} + (3t^2 - t^3 + 5) \underline{j}$$

④ (a)



(b) $D_0 = 44g$

Take moments about C.

$$65g \times 2.6 + 17g \times 3 = 44g \times 5$$

$$220 = 445 \quad \Rightarrow \underline{\underline{5}}$$

* D is 5m from C.

So 5 + 1 metres = 6 m from A

Riverbank is 1 + 0.6 + 4 = 5.6 m from A

\Rightarrow D is 0.4 m from nearest riverbank

(c) I have assumed that centre of mass of the plank is directly in the middle of the plank.

⑤ (a) 90 km h^{-1}

$$(\times 1000) = 90000 \text{ m h}^{-1}$$

$$(\div 3600) = 25 \text{ m s}^{-1}$$

(b) At max speed \Rightarrow max power output and $a=0$.

F_0 = total resistive forces.

$$= 400 \times 5 + 3000 = 5000 \text{ N}$$

$$P = F_0 v = 5000 \times 25 = 125000 \text{ W}$$

$$= 125 \text{ kW}$$

$$\textcircled{6} \text{ (a) } F = -2m v^{\frac{5}{4}}$$

$$a = \frac{F}{m} = -2v^{\frac{5}{4}}$$

$$\Rightarrow \frac{dv}{dt} = -2v^{\frac{5}{4}}$$

$$\text{(b) } \frac{dv}{dt} = -2v^{\frac{5}{4}}$$

$$\int \frac{1}{v^{\frac{5}{4}}} dv = -\int 2 dt \quad \Rightarrow \quad \int v^{-\frac{5}{4}} dv = -\int 2 dt$$

$$\text{so } \frac{v^{-\frac{1}{4}}}{-\frac{1}{4}} = -2t + C$$

$$-4v^{-\frac{1}{4}} = -2t + C$$

$$4v^{-\frac{1}{4}} = 2t + d$$

(x-1)

$$\underline{t=0} \quad v=16$$

$$4(16)^{-\frac{1}{4}} = 0 + d$$

$$\frac{4}{2} = d \quad \Rightarrow \quad d=2$$

$$4v^{-\frac{1}{4}} = 2t + 2$$


$$v^{-\frac{1}{4}} = \frac{1}{2}t + \frac{1}{2}$$

$$\frac{1}{v^{\frac{1}{4}}} = \frac{1}{2}t + \frac{1}{2}$$

$$\Rightarrow v^{\frac{1}{4}} = \frac{1}{\frac{1}{2}t + \frac{1}{2}} \quad \frac{\times 2}{\times 2}$$

$$v^{\frac{1}{4}} = \frac{2}{t+1}$$

$$\Rightarrow v = \left(\frac{2}{t+1} \right)^4$$



resolve vertically

$$4g = T_A \cos 30 + 2 \cos 50$$

$$\frac{4g - 2 \cos 50}{\cos 30} = T_A$$

$$\Rightarrow T_A = 30.4197$$

$$= 30.4 \text{ N}$$

(b) Net force inwards = $T_A \sin 30 + T_B \sin 50$

$$= 30.4197 \times \sin 30 + 20 \sin 50$$

$$= 30.5307 \text{ N}$$

$$F = \frac{mv^2}{r}$$

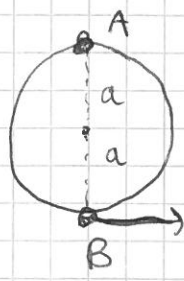
$$F = \frac{4 \times 5^2}{r}$$

$$\Rightarrow r = \frac{4 \times 25}{F} = \frac{100}{30.5307}$$

$$r = 3.275387$$

$$r = \underline{\underline{3.28 \text{ m}}}$$

8 (a) it needs to have a high enough initial E_k so that it can gain enough GPE to reach the top of the wire.



$$\Delta h = 2a$$

$$mg\Delta h = 0.3 \times g \times 2a = 0.6ag$$

so $0.6ag$ is the required initial E_k


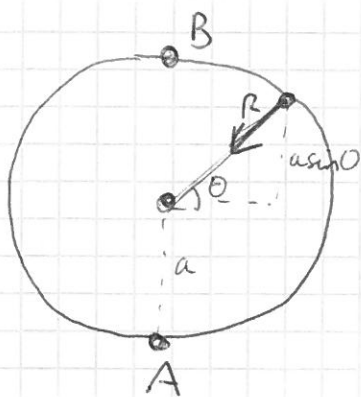
let u be min initial speed $\therefore 0.6ag = \frac{1}{2}mu^2$

$$1.2ag = 0.3u^2$$

$$\Rightarrow \sqrt{\frac{1.2ag}{0.3}} = u^2 \Rightarrow u^2 = \sqrt{4ag} = \sqrt{4} \sqrt{ag} = 2\sqrt{ag}$$

so $u > 2\sqrt{ag}$ acc

b(c)



Net force (inwards radially) = $R + mg \sin \theta$

$$\textcircled{1} \quad mg \sin \theta + R = \frac{mv^2}{r}$$

$$E_k \text{ at } B = \frac{1}{2} mu^2 - \Delta GPE$$

$$\Delta h = a + a \sin \theta \quad (\text{between A and B})$$

$$= a(1 + \sin \theta)$$

$$\text{so } \Delta GPE = mg \Delta h = mga(1 + \sin \theta)$$

$$\text{so } \frac{1}{2} mv^2 = \frac{1}{2} mu^2 - mga(1 + \sin \theta)$$

$$v^2 = u^2 - 2ag(1 + \sin \theta)$$

$$v^2 = \frac{9}{2} ag - 2ag - 2ag \sin \theta$$

$$= \frac{5}{2} ag - 2ag \sin \theta$$

$$\left(v = \sqrt{\frac{5}{2} ag - 2ag \sin \theta} \right)$$

$$\textcircled{1} \quad mg \sin \theta + R = \frac{m}{a} \left(\frac{5}{2} ag - 2ag \sin \theta \right)$$

$$mg \sin \theta + R = \frac{5}{2} mg - 2mg \sin \theta$$

$$R = \frac{5}{2} mg - 3mg \sin \theta$$

$$\underline{m=0.3}$$

$$= \frac{3}{4} g - \frac{9}{10} g \sin \theta$$

$$R = g \left(\frac{3}{4} - \frac{9}{10} \sin \theta \right)$$

$$(ii) R=0$$

$$0 = g \left(\frac{3}{4} - \frac{9}{10} \sin \theta \right)$$

$$\frac{9}{10} \sin \theta = \frac{3}{4}$$

$$\sin \theta = \frac{0.75}{0.9}$$

$$\Rightarrow \theta = \sin^{-1} \left(\frac{0.75}{0.9} \right)$$

$$= 56.4427$$

$$\theta = 56.4^\circ$$

(above the horizontal.)

$$(9) L=6m \quad \lambda = 1800N$$

$$(a) EPE = \frac{\lambda x^2}{2L} \quad x = 10-6 = 4m$$

$$= \frac{1800 \times 4^2}{2 \times 6} = 2400 J$$

$$(b) \text{Initial } E_k = \frac{1}{2} m u^2 = \frac{1}{2} \times 200 \times 8^2 = \underline{\underline{6400 J}}$$

$$E_k \rightarrow EPE$$

$$6400 = \frac{\lambda x^2}{2L} = \frac{1800 x^2}{2 \times 6}$$

$$6400 = \frac{1800 x^2}{12}$$

$$\frac{128}{3} = x^2$$

$$\Rightarrow x = 6.532 m$$

$$\text{distance from } 0 = 6 + x = 12.5 m \text{ (3sf)}$$

(c) Now $E_k \rightarrow E_{PE} + \text{work done against resistive forces.}$

$$6400 = \frac{1800x^2}{2 \times 6} + Fs$$

where $F = 800\text{N}$ and $s = \text{distance moved} = L + x = 6 + x$

so $6400 = 150x^2 + 800(6+x)$

$$6400 = 150x^2 + 4800 + 800x$$

$$\Rightarrow 0 = 150x^2 + 800x - 1600$$

(:30) $0 = 3x^2 + 16x - 32$

$$x = \frac{-16 \pm \sqrt{16^2 - 4(3)(-32)}}{2 \times 3} = \frac{-16 \pm \sqrt{640}}{6}$$

$$x = 1.5497 \quad \text{or} \quad x = -6.88$$



$$\begin{aligned} \text{distance from } 0 &= 6 + x \\ &= \underline{\underline{7.55\text{ m}}} \\ &\quad \underline{\underline{(3\text{ SF})}} \end{aligned}$$